


PREVERJANJE ZNANJA: ČAS (SPO)

Ime in priimek: _____


1. Koliko dni ima en teden? _____
2. Koliko ur ima en dan? _____
3. Koliko minut ima ena ura? _____
4. Kateri kazalec v eni uri naredi en cel krog? _____
5. Katere od naštetih ur NE merijo časa (obkroži)?


sončna ura, peščena ura, ročna ura, budilka, polna ura, stenska ura, ura matematike, digitalna ura

6. Napiši, koliko je ura (DOPOLDANSKI ČAS).













7. Napiši, koliko je ura (POPOLDANSKI ČAS).

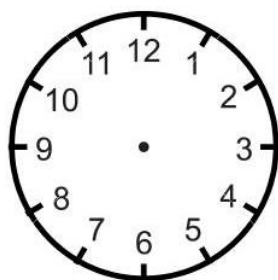




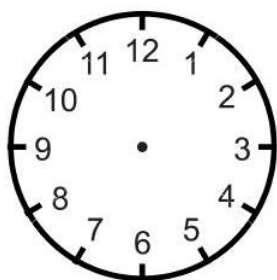




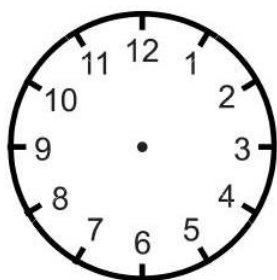
8. Nariši kazalce na uro. Urni kazalec naj bo kratek in rdeč, minutni pa dolg in moder.



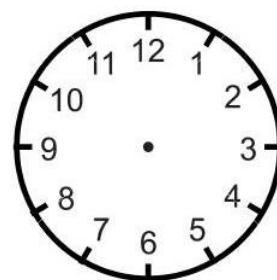
17.00



8.05



19.30



15.45

Preverjanje sedaj pošlji učiteljici.

Število doseženih točk: ___ / 18